

Name: _____

YEAR 1 MATHS



Date: _____



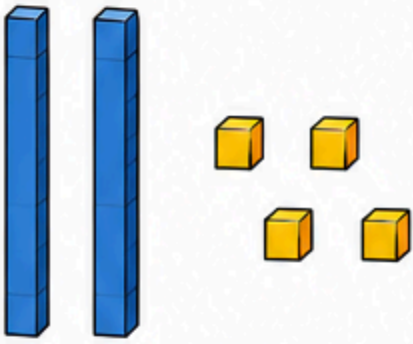
PLACE VALUE



- ★ Look at the place value blocks.
- ★ Count the tens (long rods) and ones (small cubes).
- ★ Write how many tens, how many ones and the total number.

 = 10 (ten)
 = 1 (one)


1



Tens: _____ Ones: _____

Total: _____

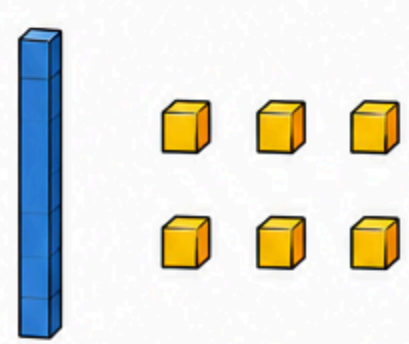
2



Tens: _____ Ones: _____

Total: _____

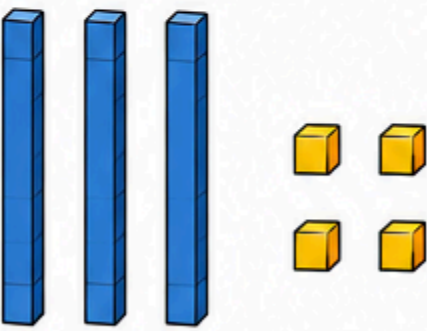
3



Tens: _____ Ones: _____

Total: _____


4



Tens: _____ Ones: _____

Total: _____

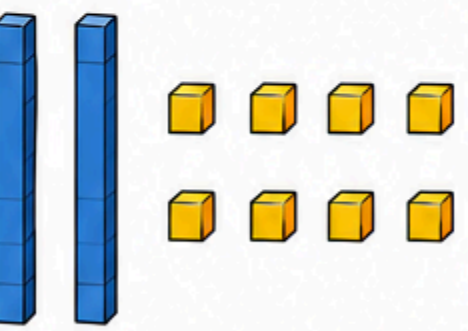
5



Tens: _____ Ones: _____

Total: _____

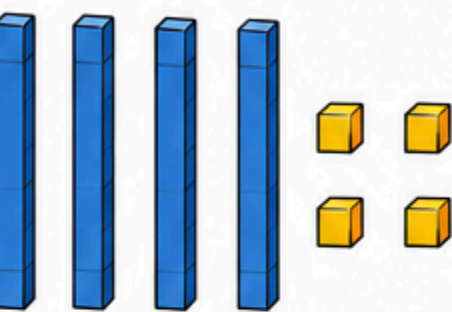
6



Tens: _____ Ones: _____

Total: _____

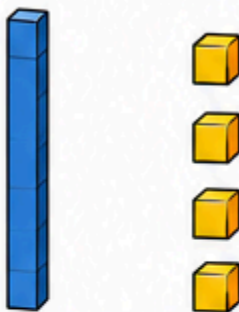
7



Tens: _____ Ones: _____

Total: _____

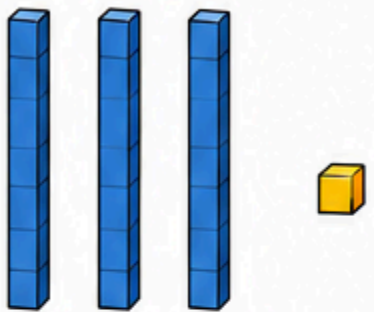
8



Tens: _____ Ones: _____

Total: _____

9



Tens: _____ Ones: _____

Total: _____



REMEMBER!

1 long rod = 1 ten

1 small cube = 1 one

