

Name: _____

YEAR 1 MATHS

Date: _____


































MY FAVOURITE ICE CREAM



★ Look at the graph below.
Answer the questions.

Our Class Favourite Ice Cream

Ice Cream	Number of Votes
 Chocolate	     
 Strawberry	   
 Vanilla	      
 Mint Choc Chip	  
 Rainbow	    

 = 1 vote

- 1 Which ice cream had the most votes?
- 2 Which ice cream had the least votes?
- 3 How many votes did Chocolate get?
- 4 How many votes did Vanilla get?
- 5 How many more votes did Vanilla get than Strawberry?
- 6 How many votes were there altogether?



REMEMBER!

A graph shows us information.
We can read it to answer questions.

