

Name: _____

YEAR 1 MATHS








Date: _____



GROCERY MATHS!






★ Look at the prices below.
Answer the questions.

Apples	Bananas	Milk	Bread	Cheese	Eggs	Cereal
						
\$2.00	\$1.50	\$2.20	\$1.80	\$3.00	\$2.60	\$4.50

ANSWER THE QUESTIONS

- How much do 2 apples cost?
- How much do 3 bananas cost?
- How much does a milk and bread cost together?
- How much do an apple, a banana and a milk cost altogether?
- How much more does cereal cost than cheese?
- If you buy 2 milks, how much will you pay?
- If you have \$5.00, can you buy a cereal? Yes No
- What is the most expensive item?
- What is the cheapest item?
- If you spend \$6.00, what two items could you buy?

SHOPPING PROBLEMS

- Lily buys these items.  How much does she pay altogether?
- Sam buys these items.  How much does he pay altogether?
- Mia buys these items.  How much does she pay altogether?



BONUS CHALLENGE!

You have \$10.00.
Make your own shopping list.
What can you buy?
List the items and the total cost.

\$ <input style="width: 100px;" type="text"/>

MATHS IN THE KITCHEN!

We use maths when we shop! We count, add, compare and make smart choices.



★ Use real prices from your local supermarket and see if you can find these items!