

Name: \_\_\_\_\_

## YEAR 1 MATHS

Date: \_\_\_\_\_



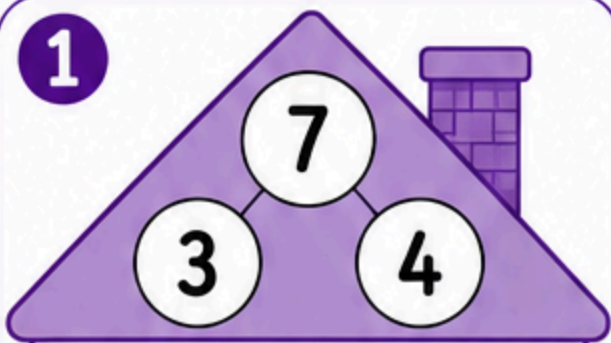
## FACT FAMILIES



A fact family uses the same numbers to make 4 different number sentences!


Look at the numbers in each house. Write the 4 number sentences that make a fact family.

1



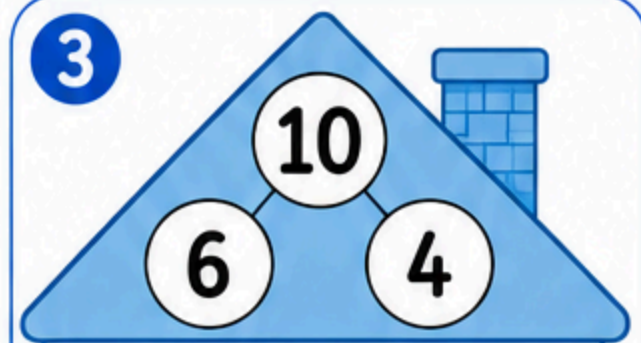
$$\begin{array}{r} 3 + 4 = 7 \\ 4 + 3 = 7 \\ 7 - 3 = 4 \\ 7 - 4 = 3 \end{array}$$

2



$$\begin{array}{r} \_ + \_ = \_ \\ \_ + \_ = \_ \\ \_ - \_ = \_ \\ \_ - \_ = \_ \end{array}$$

3



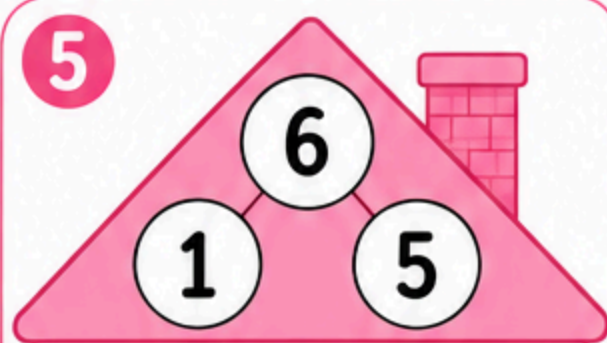
$$\begin{array}{r} \_ + \_ = \_ \\ \_ + \_ = \_ \\ \_ - \_ = \_ \\ \_ - \_ = \_ \end{array}$$

4



$$\begin{array}{r} \_ + \_ = \_ \\ \_ + \_ = \_ \\ \_ - \_ = \_ \\ \_ - \_ = \_ \end{array}$$

5



$$\begin{array}{r} \_ + \_ = \_ \\ \_ + \_ = \_ \\ \_ - \_ = \_ \\ \_ - \_ = \_ \end{array}$$

6



$$\begin{array}{r} \_ + \_ = \_ \\ \_ + \_ = \_ \\ \_ - \_ = \_ \\ \_ - \_ = \_ \end{array}$$



## REMEMBER!

Two numbers add together to make the total. You can also subtract!

