

Name: _____

YEAR 1 MATHS









Date: _____









TOY SHOP!



★ Look at the toys and their prices.
Answer the questions below.

<p>Teddy Bear</p>  <p>\$5</p>	<p>Toy Car</p>  <p>\$3</p>	<p>Building Blocks</p>  <p>\$4</p>	<p>Doll</p>  <p>\$6</p>
<p>Ball</p>  <p>\$2</p>	<p>Toy Train</p>  <p>\$7</p>	<p>Robot</p>  <p>\$8</p>	<p>Puzzle</p>  <p>\$5</p>

- 1  How much is the teddy bear? _____
- 2  How much is the ball? _____
- 3  Which toy costs \$7? _____
- 4  Which toy costs the most? _____
- 5  Which toys cost \$5? _____
- 6  If you have \$10, which two toys can you buy?



REMEMBER!
Read the prices carefully.
Look, think and choose!

